

*Ministry of Education, Human Resource Planning,  
Vocational Training and National Excellence*

*Grade 6  
National Assessment  
May 28<sup>th</sup>, 2021*

**TIME: 90 Minutes**

**DO NOT TAKE THIS PAPER OUT OF THE EXAMINATION ROOM**

©CMEU/2021

*Mathematics*

MATHEMATICS

90 MINUTES

READ THE FOLLOWING INSTRUCTIONS BEFORE ATTEMPTING THE TEST.

1. THIS PAPER CONTAINS SIXTY (60) QUESTIONS.
2. YOU HAVE NINETY (90) MINUTES TO COMPLETE THIS PAPER.
3. FOR EACH QUESTION, SHADE THE LETTER ON THE ANSWER SHEET THAT CORRESPONDS TO THE ANSWER YOU HAVE CHOSEN.

**EXAMPLE**

1. What is the **place value** of the 6 in the number 65 432 represent?

- A. Tens of thousands
- B. thousands
- C. hundreds
- D. ones

The correct answer is **tens of thousands**, letter **A**. On your answer sheet you shade



B

C

D

If there is a need to change your answer, erase it and SHADE your new answer.

## NUMBER

1. The number seventy thousand two hundred and four written in figures, is;  
  
A. 7 204  
B. 70 204  
C. 70 240  
D. 700 204
  
2. The value of the **digit 5** in the number 4 590 664 is:  
  
A. 5 hundred thousand  
B. 5 thousand  
C. 50 thousand  
D. 5 million
  
3. Which number is the **LARGEST** in the options below?  
  
A. 110 079  
B. 100 791  
C. 110 790  
D. 101 790
  
4. The number 83 025 written in expanded form is  
  
A.  $80 + 3 + 0 + 20 + 5$   
B.  $8\ 000 + 300 + 20 + 5$   
C.  $80\ 000 + 3\ 000 + 200 + 5$   
D.  $80\ 000 + 3\ 000 + 20 + 5$

5. What is the sum of  $325 + 179$  rounded to the nearest 100?
- A. 700
  - B. 600
  - C. 500
  - D. 400
6. When an odd number is added to an even number the result is ALWAYS a/an
- A. odd number
  - B. even number
  - C. prime number
  - D. square number
7. When one of the numbers below is subtracted from 900, the answer is greater than 300. Which number is it?
- A. 823
  - B. 712
  - C. 667
  - D. 579
8. The sum of  $560\,000 + 5\,435 + 14\,089$  is
- A. 579 414
  - B. 579 524
  - C. 1 017 589
  - D. 1 244 390

9. Which number must be added to 359 to get 490?
- A. 31
  - B. 131
  - C. 149
  - D. 849
10. The sum of three numbers; 201, 187 and a missing number is 500. What is the missing number?
- A. 888
  - B. 388
  - C. 288
  - D. 112
11.  $4 \times 36$  can also be written as
- A.  $(4 \times 30) + (4 \times 6)$
  - B.  $(4 \times 3) + (4 \times 6)$
  - C.  $4 \times 3 + 6$
  - D.  $43 \times 6$
12. A box holds 12 pencils. How many pencils are there in 8 similar boxes?
- A.  $8 + 12$
  - B.  $12 - 8$
  - C.  $8 \times 12$
  - D.  $12 \div 8$
13. What is  $6\,000 - 2\,369$ ?
- A. 4 369
  - B. 3 742
  - C. 3 631
  - D. 3 531

14. What is the **product** of **807** and **24**?

- A. 80 724
- B. 38 268
- C. 19 368
- D. 4 842

15. Ariel wrote the statement below on a piece of paper.

$$\square \div 8 = 5$$

If Ariel's statement is true, which one of the following statements is also true?

- A.  $\square = 5 \times 8$
- B.  $\square = 5 - 8$
- C.  $\square = 5 \div 8$
- D.  $\square = 5 + 8$

16. Julian sold a total of **319** cups of lemonade in June and July. If he Sold **138** cups in June, which number statement below represents the number of cups of lemonade Julian sold in July?

- A.  $138 + 319$
- B.  $319 - 138$
- C.  $319 + 138$
- D.  $138 - 319$

17. A store sells pens in packs. Each pack contains the same number of pens. The table below shows the relationship between the total number of packs sold and the total number of pens sold.

Number of Packs sold	Number of Pens sold
2	8
6	24
8	32

How many pens are there in each pack?

- A. 8  
B. 6  
C. 4  
D. 2
18. Three bells A, B and C ring every 3, 4 and 6 minutes respectively. If they all rang at 9 am together, at what time will they all ring at the same time again?
- A. 10:13 am  
B. 10:12 am  
C. 9:13 am  
D. 9:12 am
19. What is the difference between 9 172 and 89?
- A. 9 117  
B. 9 261  
C. 9 083  
D. 9 123

20. Sara Lee bakes cookies and cupcakes for her fundraiser. For every 2 **cupcakes** she bakes, she also bakes **3 cookies**.

If she bakes **16 cupcakes** how many **cookies** does she bake?



- A. 24  
B. 19  
C. 6  
D. 3
21. The product of **250** and **40** is

- A. 2900  
B. 1 000  
C. 10 000  
D. 100 000

22.  $9 \overline{)18009} =$

- A. 2.1  
B. 21  
C. 201  
D. 2001




23.  $587600 \div 100 =$

- A. 587.6
- B. 5 876
- C. 58 760
- D. 58 760 000

### FRACTIONS AND DECIMALS

24. In the diagram below, the **shaded** portion is represented by the fraction



- A.  $\frac{2}{5}$
  - B.  $\frac{4}{6}$
  - C.  $\frac{6}{10}$
  - D.  $\frac{3}{5}$
25. Which of the followings set of fractions is written correctly in ascending order?

- A.  $\frac{2}{7}, \frac{2}{8}, \frac{2}{9}, \frac{1}{2}$
- B.  $\frac{1}{2}, \frac{2}{7}, \frac{2}{8}, \frac{2}{9}$
- C.  $\frac{2}{9}, \frac{2}{8}, \frac{2}{7}, \frac{1}{2}$
- D.  $\frac{1}{2}, \frac{2}{9}, \frac{2}{8}, \frac{2}{7}$

26. Janis, Marlon and their mother were eating a cake. Janis ate  $\frac{1}{2}$  of the cake. Marlon ate  $\frac{1}{4}$  of the cake. What fraction of the cake did their mother get?

A.  $\frac{3}{4}$

B.  $\frac{1}{2}$

C.  $\frac{7}{10}$

D.  $\frac{1}{4}$

27. Which decimal below represents **2 tenths**?

A. 0.02

B. 0.2

C. 200.0

D. 21.0

28. Which group of decimals is arranged in **ascending** order?

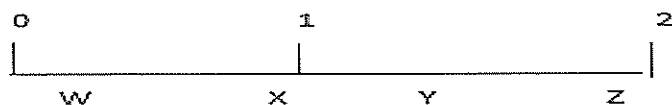
A. 0.4 1.2 5.0 0.25

B. 1.2 5.0 0.4 0.25

C. 5.0 1.2, 04 025

D. 0.25 0.4 1.2, 5.0

29. On the number line shown below, the decimal **0.2** would be best located at



A. W

B. X

C. Y

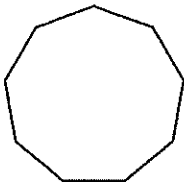
D. Z

## GEOMETRY

30. A quadrilateral must be a trapezium if it has

- A. two pairs of parallel sides
- B. one pair of parallel sides
- C. a diagonal as an axis of symmetry
- D. one pair of adjacent sides equal

31. The shape shown below is a/an



- A. decagon
- B. octagon
- C. hexagon
- D. nonagon

32. Which of the following letters DOES NOT have a line of symmetry?

C

A

M

B


V.

C

J

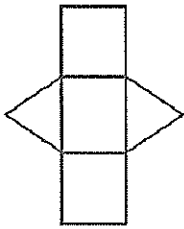
D

33. The building shown below is made up of a

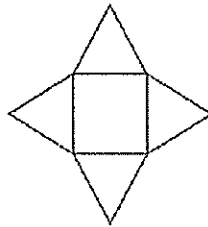


- A. cuboid and triangular prism
- B. cuboid and triangular pyramid
- C. rectangular based pyramid and triangular prism
- D. rectangular based pyramid and triangular based pyramid

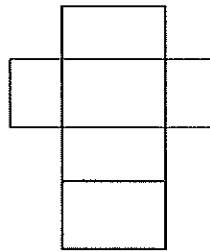
34. Which of the following is the net of a cube?



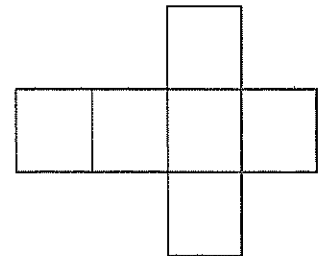
A



B

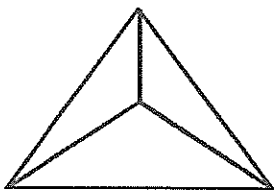


C



D

35. The solid shown below is a



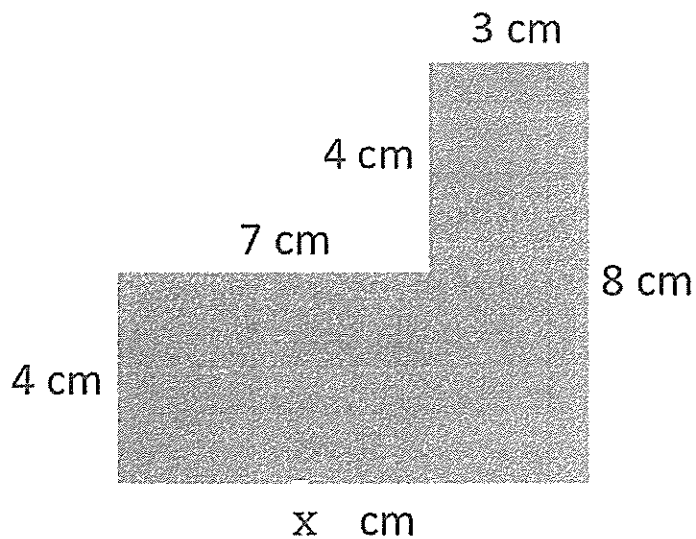
- A. Triangular based prism
- B. Triangular based pyramid
- C. quadrilateral based pyramid
- D. quadrilateral based prism

## MEASUREMENT

36. How many millimeters (mm) are there in 2 500 cm?

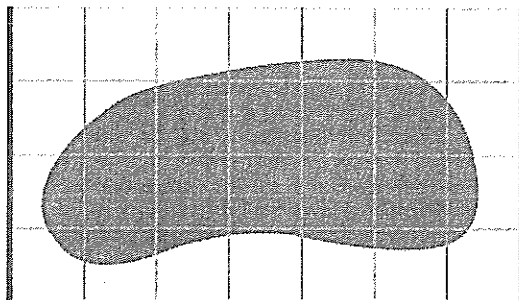
- A. 25 000
- B. 25
- C. 250
- D. 2 500

37. The missing length 'X' in the shape below is,



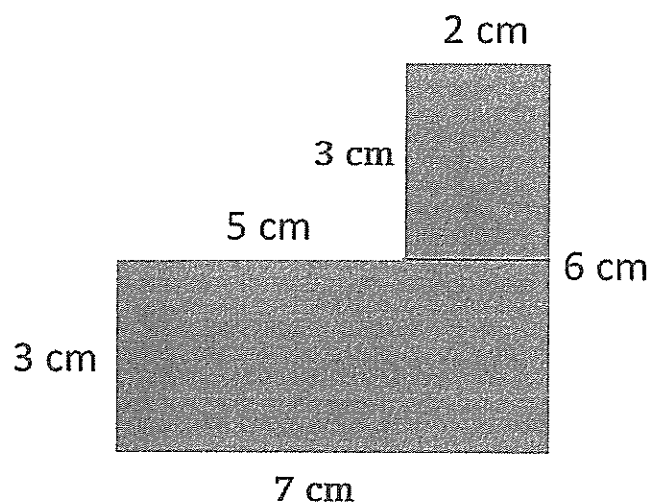
- A. 26 cm
- B. 14 cm
- C. 12 cm
- D. 10 cm

38. Anthony wants to fill his flower bed (shaded region) with new plants. Each plant needs one square unit of space. How many flowers can he plant?



- A. 28  
B. 13  
C. 8  
D. 5
39. Mr. Joseph has a garden, which is 400 m long and 800 m wide. What is the area of his garden?
- A. 1 200 m<sup>2</sup>  
B. 2 400 m<sup>2</sup>  
C. 320 000 m<sup>2</sup>  
D. 240 000 m<sup>2</sup>

40. The area of the shape shown below is



- A.  $30 \text{ cm}^2$
- B.  $42 \text{ cm}^2$
- C.  $27 \text{ cm}^2$
- D.  $36 \text{ cm}^2$

41. How many 250 ml glasses can be filled from a 2-litre coke bottle?



2 l bottle



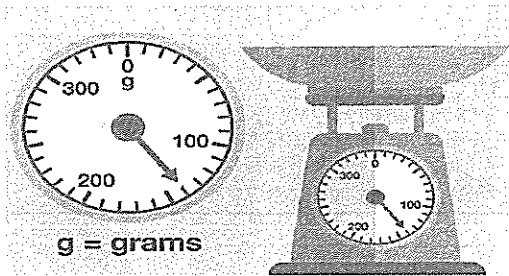
250 ml glass

- A. 25
- B. 8
- C. 4
- D. 2

42. 285 g converted to Kg is

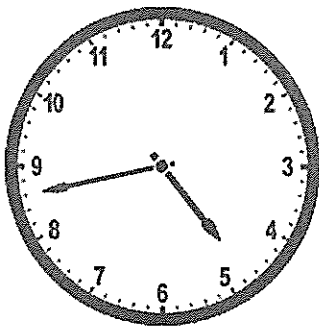
- A. 2850 Kg
- B. 28.5 kg
- C. 2.85 Kg
- D. 0.285 Kg

43. What is the weight of the item shown below?



- A. 100.4 g
- B. 10.4 Kg
- C. 140 g
- D. 0.104 Kg

44. The time shown on the clock is



- A. 17 minutes to 5
- B. 25 minutes past 8
- C. 11 minutes past 5
- D. 9 minutes to 5




45. Ms. Anderson bought the following plane ticket shown below  
Her boarding time is at 17:30, what other way can the time be given?

BOARDING PASS				Podo	
PASSENGER NAME U/EPHRU					
PN (PANGO)		TO ACNH (NOOK INTL)		GATE N64	
				BOARD TIME 17:30	
PN -ACNH N64		BOARD TIME 17:30		SEAT 2B	
FRI MARCH 20 2020		DEPARTS: 6:00 pm ARRIVES: 8:05 pm		BOARDING GROUP 1	
CONFIRMATION IS483LL3		Barcode		QR Code	
Nook Inc. Getaway Package					

- A. 7:30 am  
B. 5:30 pm  
C. 7:30 pm  
D. 5:30 am
46. Jason leaves Roseau at 9:57 am and reaches Marigot at 10: 55 am. How long was the trip?
- A. 1 hr 3 minutes  
B. 1 hr 8 minutes  
C. 98 minutes  
D. 58 minutes

47. Barney had the following number of dollar bills as shown below. How much money does he have in all?



- A. \$450.00  
B. \$185.00  
C. \$485.00  
D. \$610.00
48. Karen bought a pair of shoes for \$215 and sold it to make a \$30 profit. How much did she sell the shoes for?

- A. \$230.00  
B. \$235.00  
C. \$245.00  
D. \$185.00



49. Marcus has \$26.00. He went into KFC and saw the following snack packages. Which two packages can he buy?

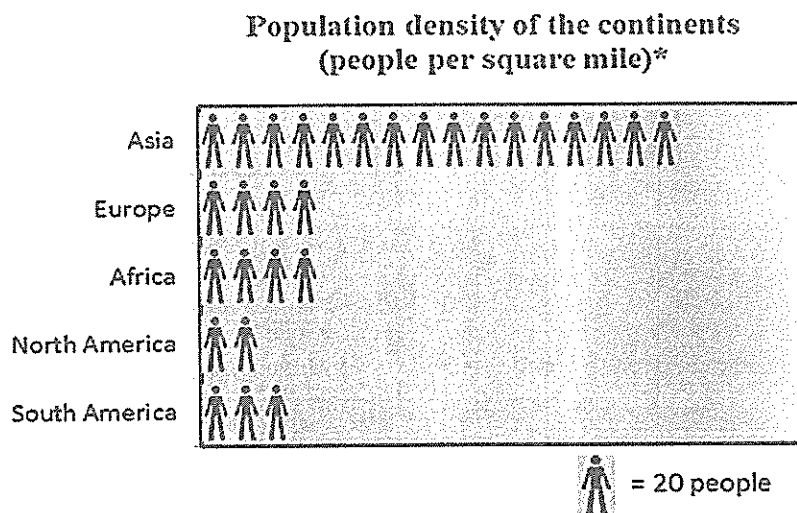


- A. Big Crunch and Zinger
- B. Golden BBQ and Zinger
- C. Golden BBQ and Big Crunch
- D. 5 Dipping wings combo and Big Crunch


### STATISTICS AND DATA HANDLING

50. Using a checklist or recording information on a tally chart are activities used in
- A. collecting data
  - B. analyzing data
  - C. interpreting data
  - D. making judgements

Use the diagram below to answer Questions 51 to 54.

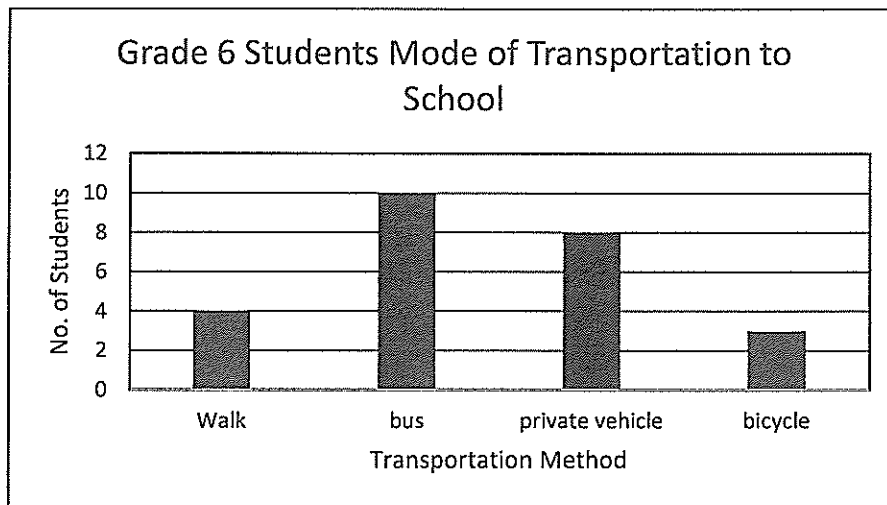


51. The diagram above is an example of a
- A. bar graph
  - B. pie chart
  - C. pictograph
  - D. frequency table
52. Which one is the least populated continent per square mile?
- A. Asia
  - B. Africa
  - C. North America
  - D. South America
53. What is Asia's population density per square mile?
- A. 320 people
  - B. 160 people
  - C. 20 people
  - D. 16 people

54. If the key in the diagram above represented 5 people instead of 20, how many  would be needed to represent the population density of North America?

- A. 8
- B. 4
- C. 1
- D.  $\frac{1}{2}$

Use the diagram below to answer Questions 55 and 56.



55. How many students ride a bicycle to school?
- A. 4
  - B. 3
  - C. 2
  - D. 1

56. How many students are in Grade 6?

- A. 26
- B. 25
- C. 24
- D. 23

57. What number would most likely be in the **fifth** star?



- A. 58
- B. 63
- C. 72
- D. 81

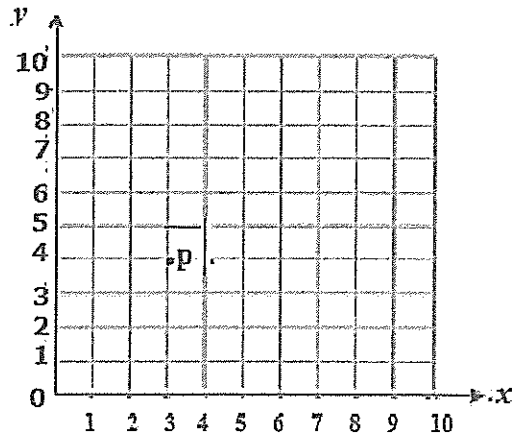
58. If  $97 - n = 34$ , then  $n =$

- A. 131
- B. 121
- C. 63
- D. 53

59. What is the next number in the sequence; 2, 5, 11, 23, \_\_\_\_?

- A. 47
- B. 44
- C. 36
- D. 34

60. The coordinates of point P are



- A. (4, 3)
- B. (3, 4)
- C. (2, 3)
- D. (4, 5)

END OF EXAMINATION

*Ministry of Education & Human Resource Development  
Vocational Training & National Excellence  
Dominica*

*Grade 6  
National Assessment  
May 28, 2021*

**TIME: 75 Minutes**

**DO NOT TAKE THIS PAPER OUT OF THE EXAMINATION ROOM**



# MINISTRY OF EDUCATION AND HUMAN RESOURCE DEVELOPMENT.

## INSTRUCTIONS

READ THE FOLLOWING INSTRUCTIONS BEFORE ATTEMPTING THE TEST.

1. THIS PAPER CONTAINS 50 QUESTIONS.
2. FOR EACH QUESTION, CIRCLE THE LETTER ON THE ANSWER SHEET THAT MATCHES THE ANSWER YOU HAVE CHOSEN.
3. USE A PENCIL TO SHADE IN THE CORRECT ANSWER.

### EXAMPLE:

1. Which object is most likely to float in a container of water?

- A. leaf
- B. key
- C. pen
- D. coin

The correct answer is leaf, letter A. on your answer sheet you mark:



B.

C.

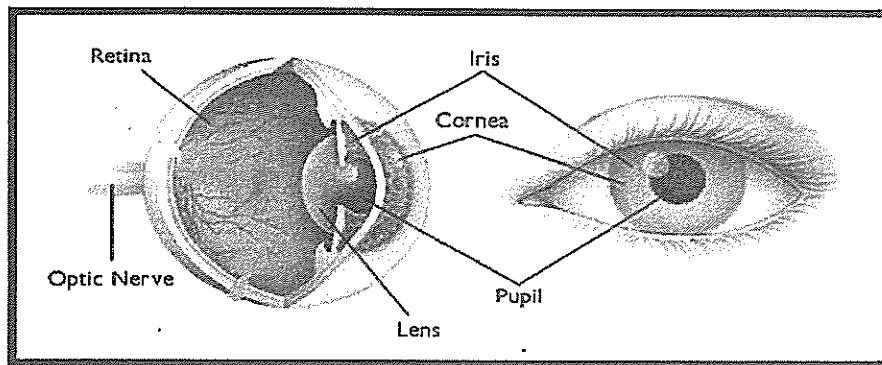
D

If you need to change your answer, erase it and circle your new answer.

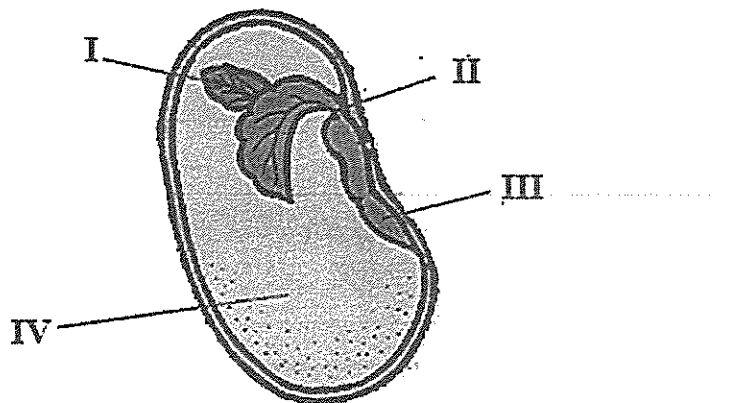
4. If you cannot answer a question leave it and move on to the next one. You will come back to it later if you have more time.

## LIFE SCIENCE

1. Which part of the eye labelled above is responsible for sending messages to the brain?

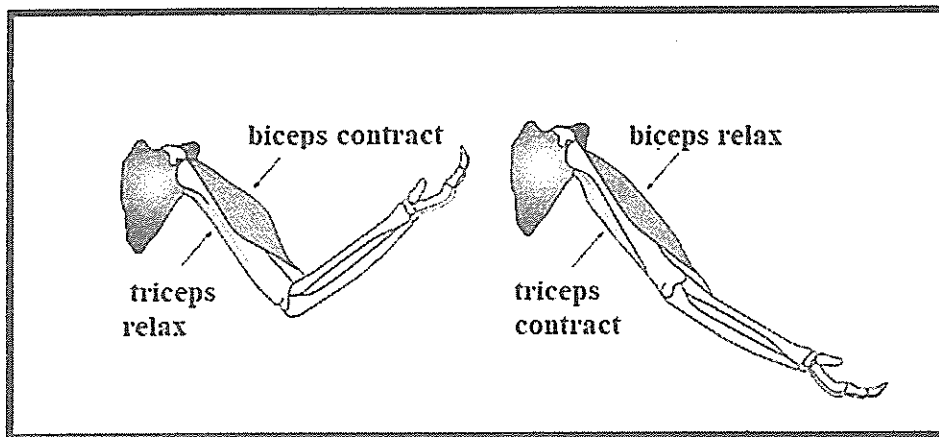


- A. Retina  
B. Iris  
C. Pupil  
D. Optic nerve
2. The diagram below represents a seed. Which part of the seed is responsible for providing food to the young seedling?




- A. 1  
B. 2  
C. 3  
D. 4

3. Study the diagram below and answer the question that follows.

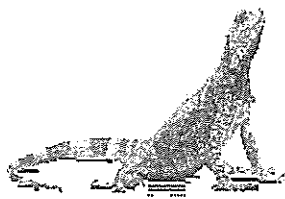


Which **ONE** of the following statements is true?

- A. Biceps work alone to move the arm.
  - B. Triceps work alone to move the arm.
  - C. Muscles work in pairs to move the arm.
  - D. Muscles are not necessary for arm movement.
4. Which one of these animals does NOT breathe through lungs?




bird  
A



lizard  
B

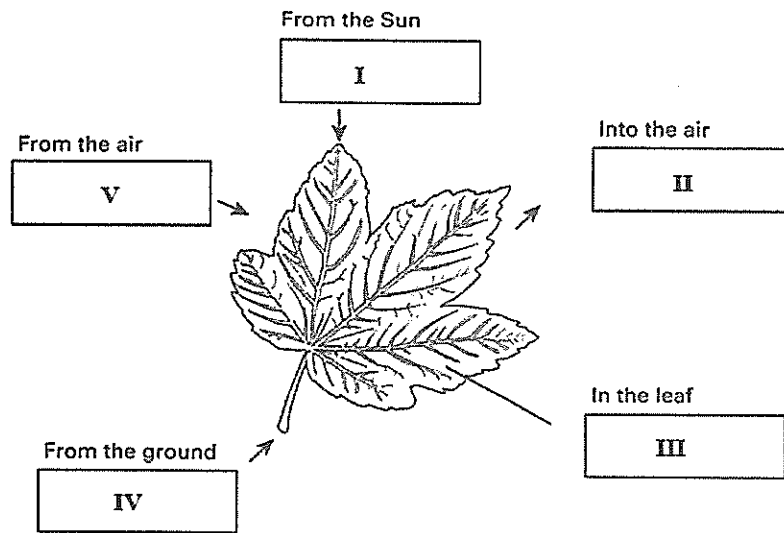


whale  
C



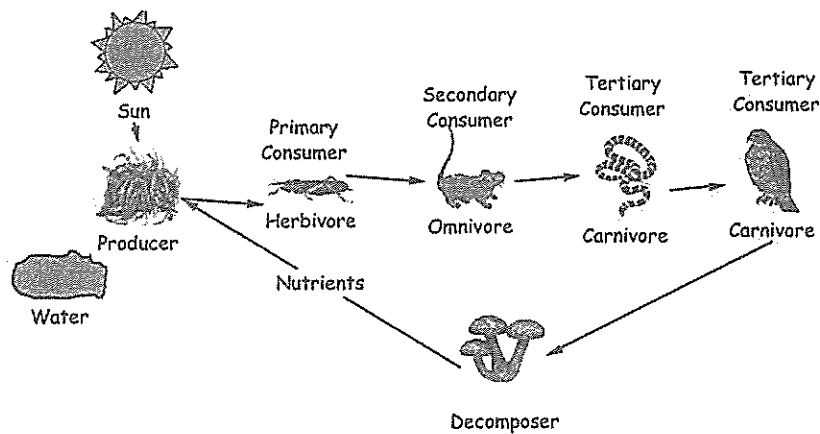
shark  
D

Look carefully at the diagram below, then answer Items 5 to 6.



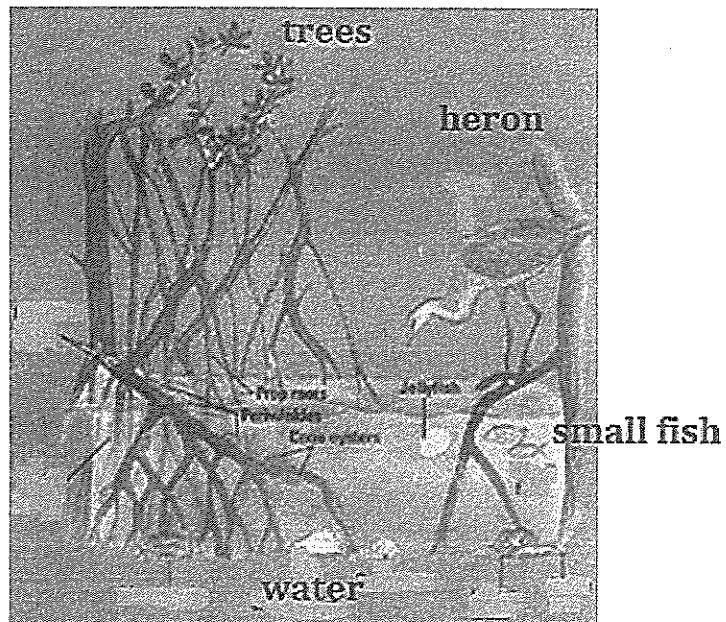
5. Which of the following should be placed in the box labelled II?
- A. oxygen
  - B. carbon dioxide
  - C. chlorophyll
  - D. starch
6. The process demonstrated above is
- A. respiration
  - B. growth
  - C. reproduction
  - D. photosynthesis

Study the diagram below and answer the ITEMS 7 to 9.



7. Which of the following is the **MAJOR** source of energy for this food web?
- A. decomposer
  - B. water
  - C. sun
  - D. herbivore
8. Which one of the following organisms reintroduces nutrients into the soil?
- A. producer
  - B. decomposer
  - C. herbivore
  - D. sun
9. Which of the organisms in the food web above can eat both plants and animals?
- A. decomposer
  - B. herbivore
  - C. omnivore
  - D. carnivore

Study the picture below of an example of an ecosystem to answer ITEMS 10 and 11.

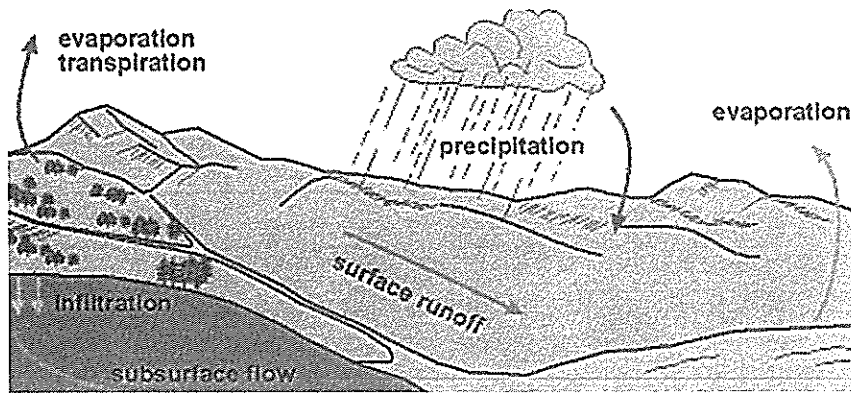


10. Which of the following is an abiotic factor?
- A. water
  - B. heron
  - C. fish
  - D. tree
11. Which habitat can the above ecosystem be found?
- A. rainforest
  - B. stream
  - C. sea shore
  - D. mangrove swamp

12. An \_\_\_\_\_ is a plant or animal that is so few in number that it is close to extinction.
- A. endangered organism
  - B. omnivore
  - C. adapted organism
  - D. adaptation
13. One adaptation of bears is that they sleep throughout the winter season. This is an example of a \_\_\_\_\_ adaptation.
- A. behavioural
  - B. physical
  - C. camouflage
  - D. mimicry
14. As soon as baby turtles are hatched they head straight towards the sea. This is an example of
- A. mimicry
  - B. instinct
  - C. camouflage
  - D. reproduction
15. In Dominica, the mountain chicken was infected with a fungus, which drastically reduced its population. We can say that this species almost suffered from
- A. starvation
  - B. extinction
  - C. variation
  - D. migration

## EARTH AND SPACE

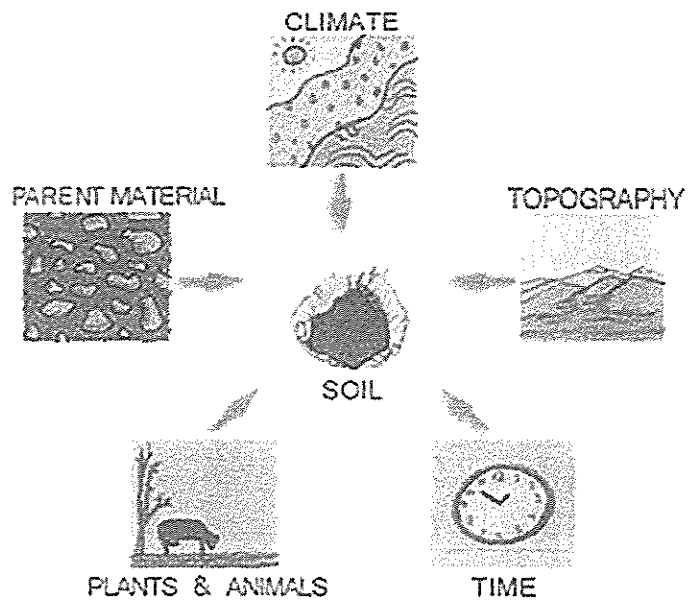
16. What is a natural resource?
- A. Something one does naturally
  - B. A way to cook without using cooking gas
  - C. Something found in nature used by people
  - D. Something made at home without using chemicals
17. Fossil fuels are considered **non-renewable** resources because they
- A. burn quickly
  - B. are in such high demand
  - C. take millions of years to form
  - D. pollute the air
18. What role does runoff play in the water cycle?



- A. It carries water from precipitation into the oceans.
- B. It is the process where liquid turns to water vapour.
- C. It takes water out of the water cycle.
- D. It is not part of the water cycle

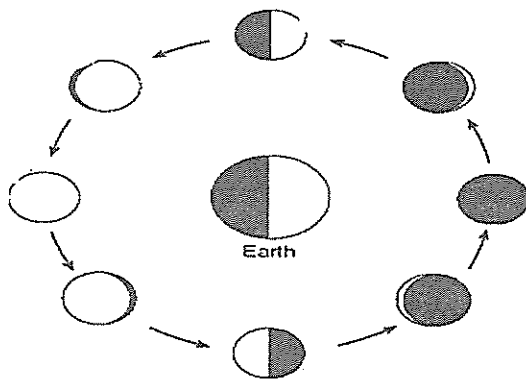


19. The diagram below illustrates




- A. factors of soil conservation
- B. factors of soil formation
- C. organisms found in soil
- D. resources needed for a farm

20. The diagram shown below, BEST illustrates



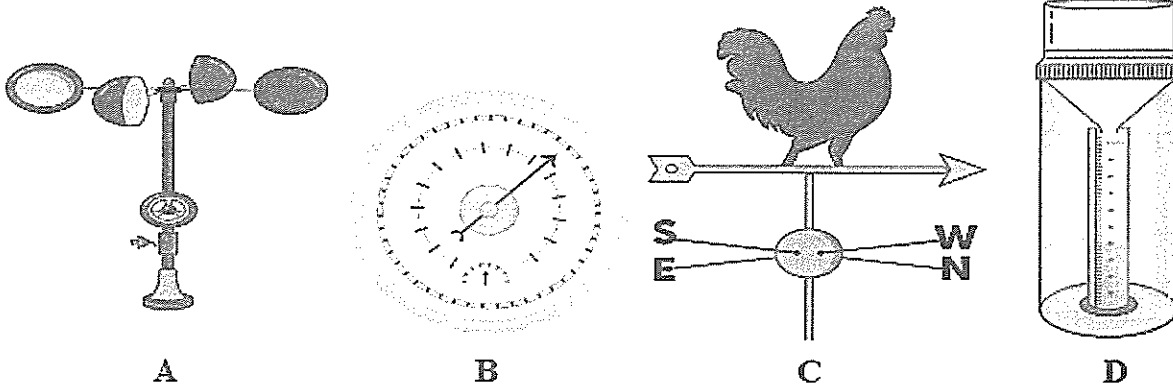
- A. Lunar Eclipse
- B. Solar Eclipse
- C. Phases of the Moon
- D. The Universe

21. This astronaut's \_\_\_\_\_ will be different on the moon compared to when he is on Earth.








- A. height
  - B. shoe size
  - C. weight
  - D. age
22. A richter scale is used to measure the strength of a/ an
- A. hurricane
  - B. tornado
  - C. volcano
  - D. earthquake

23. Ryan's group in class had to use an instrument to measure and record the wind speed on a particular day. Which of the following instruments did Ryan's group use?



Study the weather forecast for the weekday shown below and answer Item 24.

MONDAY	TUESDAY	WEDNESDAY	THURSDAY	FRIDAY
				

24. On which day would the temperature be the hottest?
- A. Monday
  - B. Wednesday
  - C. Thursday
  - D. Friday

25. Which one of the following is NOT a priority in preparing for the disaster below?

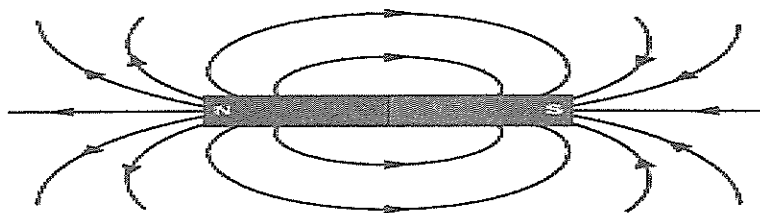


- A. Identifying evacuation routes for people and animals
- B. Cutting down of overhanging tree branches close to homes
- C. Packing and storing first aid kits and battery operated radio.
- D. Collecting drinking water and non-perishables.

### PHYSICAL SCIENCE

26. Which of the following statements about the force applied on an object is true? It does not change its \_\_\_\_\_
- A. mass
  - B. length
  - C. shape
  - D. direction of motion
27. The friction between two rubbing surfaces can be **BEST** reduced by
- A. sprinkling sand on the surfaces
  - B. lubricating the surfaces
  - C. drying the rubbing surfaces
  - D. making the surfaces rough

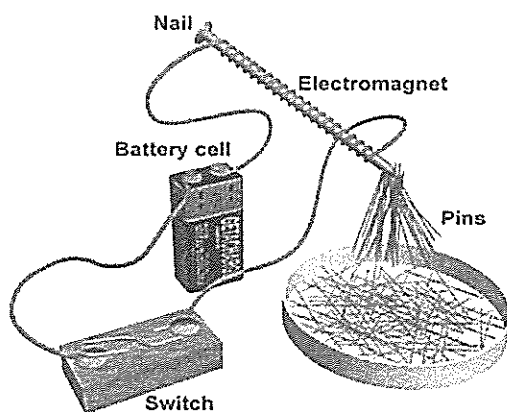
28. The diagram below shows the magnetic field lines for a bar magnet. Which statement **BEST** describes the strengths of the magnetic field for the bar magnet?



The magnetic field is strongest at the \_\_\_\_\_


- A. north pole of the magnet only
- B. south pole of the magnet only
- C. north and south poles of the magnet
- D. region between the north and south Pole.

Use the diagram below to answer Items 29 and 30



29. What must be done to increase number of the pins picked up by the electromagnet above?
- A. the switch must be turned off
  - B. make more turns of the wire around the nail
  - C. unwind some of the wire around the nail
  - D. add a third wire to the battery poles

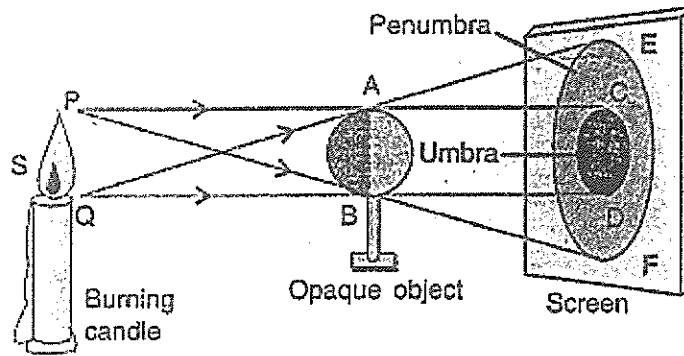
30. An electromagnet, as seen above, is an example of a
- A. bar magnet
  - B. permanent magnet
  - C. damaged magnet
  - D. temporary magnet
31. An example of potential energy would be
- A. a bow pulled with an arrow and not yet released
  - B. grandma rocking in a chair
  - C. water boiling on a stove
  - D. a shooting star high up in the sky
32. Which of the following is an example of Kinetic Energy?
- A. A child jumping rope
  - B. A swimmer ready to dive
  - C. A stuff toy lying on a table
  - D. Firewood stacked in a fireplace
33. You can see your image in a shiny, flat surface because light waves bounce directly back at you and your eyes.



This is an example of

- A. diffraction
- B. reflection
- C. refraction
- D. transparency

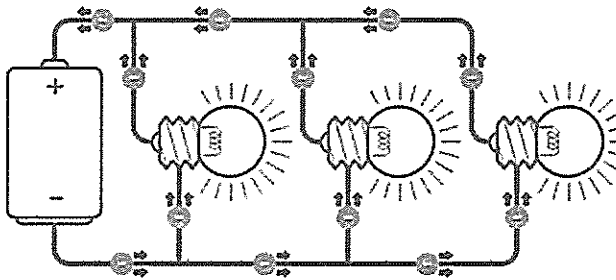
Study the diagram and answer the question that follows.



34. Which property of light best describes why a shadow (penumbra and umbra) was formed in the diagram above?

- A. Light can bend around objects
- B. Light can be reflected
- C. Light travels in a straight line
- D. opaque objects allows light to pass through

35. In a parallel circuit when one bulb burns out the rest



- A. stops the flow of energy
- B. will also go out
- C. can still light
- D. will light dimmer

36. All of these are luminous objects **EXCEPT**




a torch

**A**




a light bulb

**B**



the sun

**C**



the moon

**D**

37. Which of the following is an example of an insulator?


- A. iron
- B. steel
- C. rubber
- D. copper

38. Equal amounts of flour, sugar and salt are added to three separate containers with equal volumes of boiling water. Each mixture is stirred for three minutes and observations are recorded. Which of the following is correct?

- A. No changes will be observed.
- B. The sugar and salt will dissolve but the flour will not.
- C. All three substances will dissolve.
- D. The flour and sugar will dissolve but the salt will not.

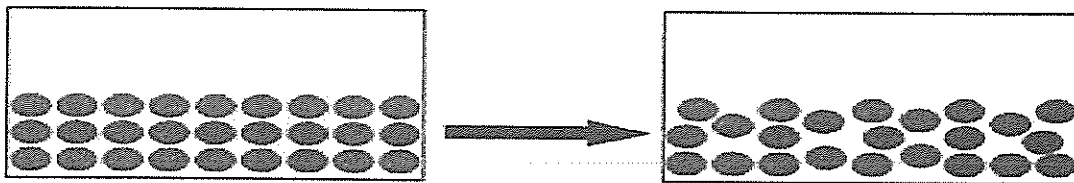


39. The diagram below shows a glass tank **completely filled** with a block of ice. After 1 hour, it was noticed that the block of ice had melted, as shown in the diagram below.



Which one of the following **BEST** explains the above observation?


- A. The melted ice has a smaller mass than the block of ice
  - B. The melted ice has a smaller volume than the block of ice.
  - C. The melted ice can be compressed to fit the volume of the glass.
  - D. The melted ice has a larger mass than the block of ice.
40. Which change of state occurs when particles in a solid begin to move slowly past each other?



- A. distillation
- B. evaporation
- C. condensation.
- D. melting


## AGRICULTURE SCIENCE

41. What is soil erosion?
- A. The process by which soil is formed
  - B. A process that involves the removal and transport of soil by weathering agents
  - C. A natural method of filtering harmful agents from soil
  - D. A process often known as greenhouse effect
42. When plants, animals and other organisms die, they become part of the soil. What is this part of the soil called?
- A. humus
  - B. clay
  - C. silt
  - D. sand
43. Adam grabs a topsoil sample in his hand. He rolls it into a ball. The soil feels gritty and the ball of soil crumbles. What part of the topsoil most likely made the top soil gritty?




- A. clay
- B. sand
- C. silt
- D. humus

44. Which of the following diseases usually affect the leaves of banana plants in Dominica?




- A. Early blight
  - B. Late blight
  - C. Crown rot
  - D. Leaf spot
45. The crop shown below is a good source of



- A. Vitamin A
- B. Protein
- C. Carbohydrates
- D. Vitamin E

46. The animal below lives in a

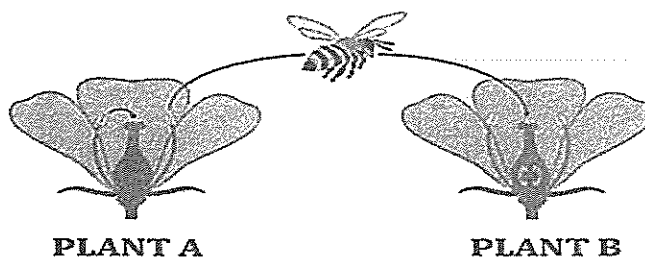


- A. sty
- B. hutch
- C. kennel
- D. den

47. Which of these crops is NOT grown in Dominica?

- A. Julie Mango
- B. Lemon
- C. Grape
- D. Sugar Cane

48. The diagram below represents



- A. self pollination
- B. cross pollination
- C. fertilization
- D. respiration

49. The weevil, seen below, is known to bore holes in parts of the following plants **EXCEPT**



- A. Soybean
  - B. Cocoa
  - C. Corn
  - D. Passion fruit
50. The following are methods of fishing **EXCEPT**
- A. trawling
  - B. lining
  - C. dragging
  - D. seining

**END OF EXAMINATION**

*Ministry of Education & Human Resource Development*  
*Vocational Training & National Excellence*

*Grade 6*  
*National Assessment*  
*May 27, 2021*

TIME: 75 Minutes

DO NOT TAKE THIS PAPER OUT OF THE EXAMINATION ROOM

©CMEU/2021

*Social Sciences*

## SOCIAL SCIENCES EXAMINATION

1HR 15 MINUTES

READ THE FOLLOWING INSTRUCTIONS BEFORE ATTEMPTING THE TEST.

1. THIS PAPER CONTAINS 50 QUESTIONS.
2. FOR EACH QUESTION, CIRCLE THE LETTER ON THE ANSWER SHEET THAT MATCHES THE ANSWER YOU HAVE CHOSEN.
3. USE A PENCIL TO SHADE IN THE CORRECT ANSWER.

**EXAMPLE:**

1. Which of these is a primary product?

- A. soap
- B. pasta
- C. banana
- D. fertiliser

The correct answer is banana, letter C. On your answer sheet you mark:

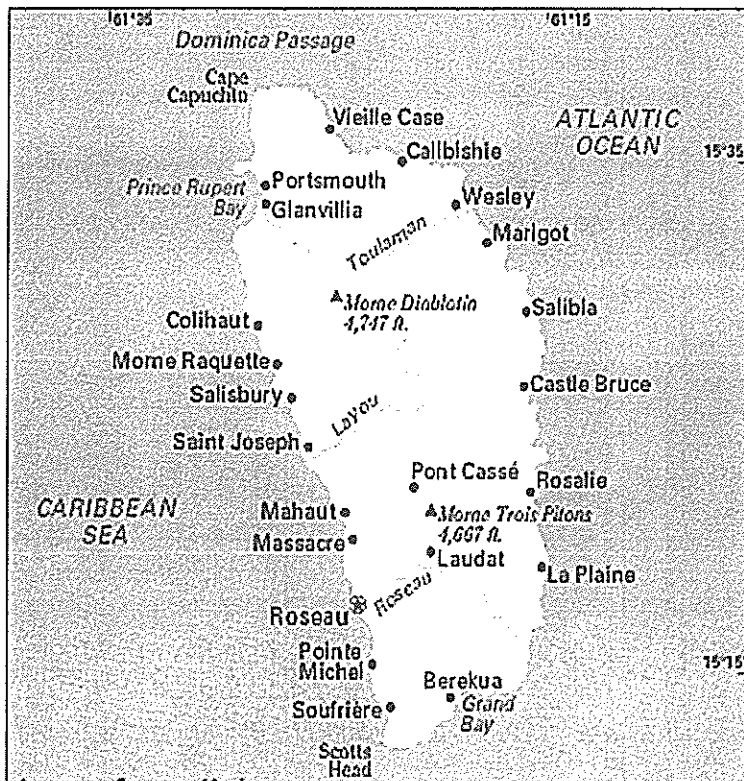
A.                      B.                                            D

If you need to change your answer, erase it and circle your new answer

4. IF YOU CANNOT ANSWER A QUESTION LEAVE IT AND MOVE ON TO THE NEXT ONE. YOU WILL COME BACK TO IT LATER IF YOU HAVE MORE TIME

## LOCATION, PEOPLE AND PLACES

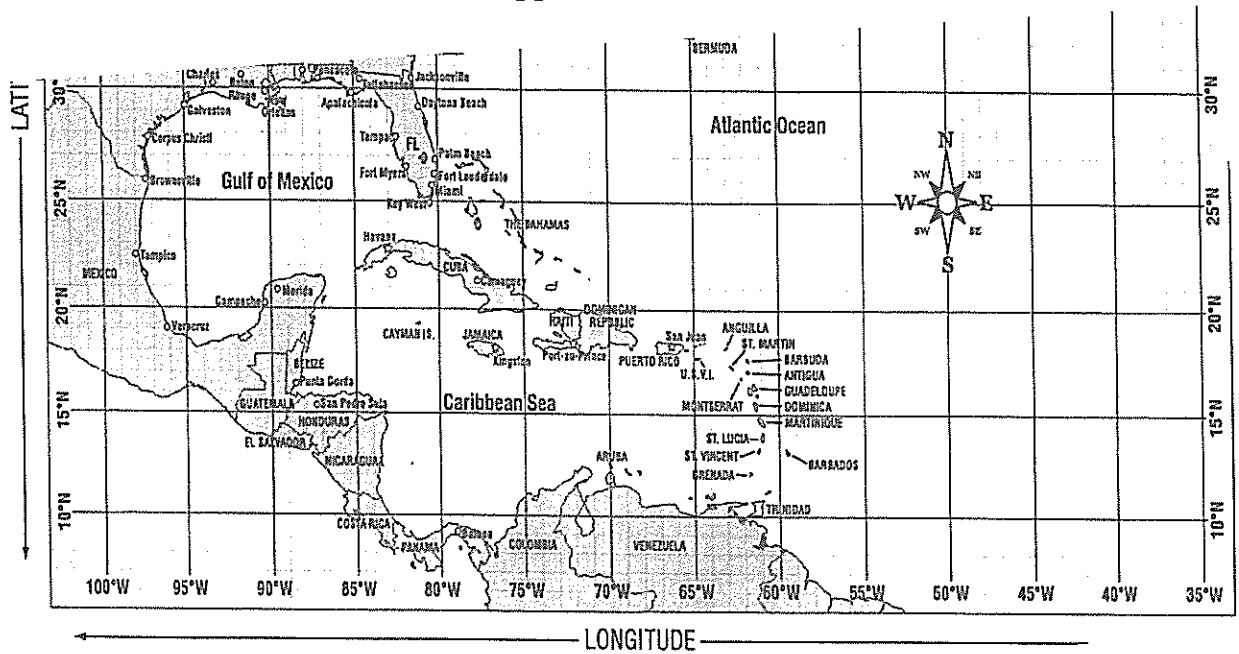
1. To travel from Salisbury to Wesley one must travel



- A. Due north  
B. Due east  
C. North east  
D. South west
2. One reason why a cruise ship berth was built at Prince Rupert Bay is because
- A. the sun on that side of the island is brighter  
B. there are more whales on that side  
C. hurricanes usually pass on the other side of the island  
D. the water is calmer and safer on that side of the island



3. Which Caribbean island is located approximately  $18^{\circ}$  N  $77^{\circ}$  W?



- A. Puerto Rico
  - B. Jamaica
  - C. Cayman Islands
  - D. Cuba
4. On which continent is the Sahara Desert located?



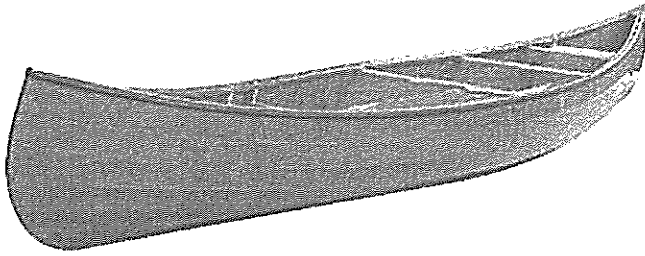
- A. 1
- B. 2
- C. 3
- D. 4

5. The **BEST** definition of climate is the
- A. state of the atmosphere on a given day.
  - B. average weather condition over a period of time.
  - C. temperature of the atmosphere of an area.
  - D. amount of wind an area experiences
6. Which natural disaster is shown below?



- A. flood
  - B. volcano
  - C. tsunami
  - D. earthquake
7. The intensity of an earthquake is measured using the
- A. Richter scale
  - B. Metric scale
  - C. Guttman scale
  - D. Rating scale

8. Which ethnic group in the Caribbean influenced canoe building?



- A. Europeans
  - B. Africans
  - C. East Indians
  - D. Amerindians
9. The group of people shown below came to the Caribbean mainly to



- A. work on the sugar plantations.
  - B. become rich.
  - C. work as indentured servants.
  - D. purchase lands.
10. Which ethnic group is referred to as the Kalinagos?
- A. Lebanese
  - B. Chinese
  - C. Africans
  - D. Amerindians

## CIVIC IDEAL AND PRACTICES

11. Why does the steel pan have indentations (dents) on its top surface?




- A. To prevent the drumsticks from sliding around
  - B. To produce different tones when playing the pan
  - C. To make the pan look used and expensive
  - D. The drumsticks indented the pan while playing
12. Folklore is an important part of culture because,
- A. it is better to tell stories than to play Roblox
  - B. it has the power to make dreams come true
  - C. stories are a good form of entertainment
  - D. it helps to pass on important traditions and ways of life
13. Who are the citizens of a country?
- A. People who love the country
  - B. People who make up the government
  - C. People who belong to the country
  - D. People who are able to vote at elections

Use the picture below to answer Questions 14 and 15



14. The girls in the picture are wearing a
- A. carnival costume
  - B. Wob Dwiyet
  - C. sensay
  - D. Jupe
15. What month, in Dominica, do you think this photo was taken?
- A. February
  - B. December
  - C. October
  - D. August
16. Mr. Raymond Lawrence contributed significantly to Dominica's
- A. culture
  - B. youth skills training programme
  - C. tourism industry
  - D. educational development

17. The present Prime Minister of Barbados is
- A. Sir Grantley Adams
  - B. Hon. Mia Mottley
  - C. Hon. Allen Chastnet
  - D. Hon. Andrew Holness
18. One of the **MAIN** reasons for having a government in a country is that it
- A. makes rules about who can and cannot live in the country
  - B. governs, rules, protects and meets society's basic needs
  - C. allows people to do whatever they want
  - D. sells goods and services to keep the economy strong
19. Which type of leader leads by example?
- A. Autocratic
  - B. Democratic
  - C. Authoritarian
  - D. Laissez-faire
20. Which one of these individuals, shown below, is a sports leader?



A



B




C



D

21. The person who heads a **village council** is called a:
- A. Chairperson
  - B. President
  - C. Mayor
  - D. Parliamentary representative
22. The **MAIN** reason why people join groups is to
- A. wear a special logo on their shirts
  - B. feel a sense of belonging
  - C. tell others what to do
  - D. collect money from other people
23. Dominica is a member of **ALL** these organizations **EXCEPT**
- A. CSME
  - B. OECS
  - C. OAS
  - D. OPEC
24. **D.A.R.E** is an international organization. The main function of **D.A.R.E** is to
- A. make sure that children stay in school
  - B. help a political party get into power
  - C. tell the citizens of a country how to behave
  - D. help young people stay away from drugs and violence
25. Which one of the following would be considered a cooperative?
- A. National Bank of Dominica
  - B. Dominica Association of Teachers
  - C. Vielle Case Credit Union
  - D. Dominica Public Service Union

26. Mrs. Maxwell was not happy with the way she was fired from her job. Which one of the following organizations would she **MOST LIKELY** go to in order to file a complaint?



- A. Dominica Police Department
  - B. Labour Division
  - C. Inland Revenue
  - D. Dominica Social Security
27. Mr. Jones is a banana farmer who decided to join an “**agricultural cooperative**”. He joined the cooperative for all of the following **EXCEPT** to
- A. meet and get ideas from other banana farmers
  - B. assist other farmers like himself
  - C. improve his banana production and sales
  - D. collect money from farmers in his surrounding village
28. The **MAIN** reason why countries are interdependent is because they need
- A. help to fight other countries for crude oil
  - B. to share skills and natural resources to prosper
  - C. to be independent and use their own resources
  - D. to travel easily from one place to the other



## RESOURCES

29. Look at the picture and answer the question that follows.



The picture best describes which one of the following practices?

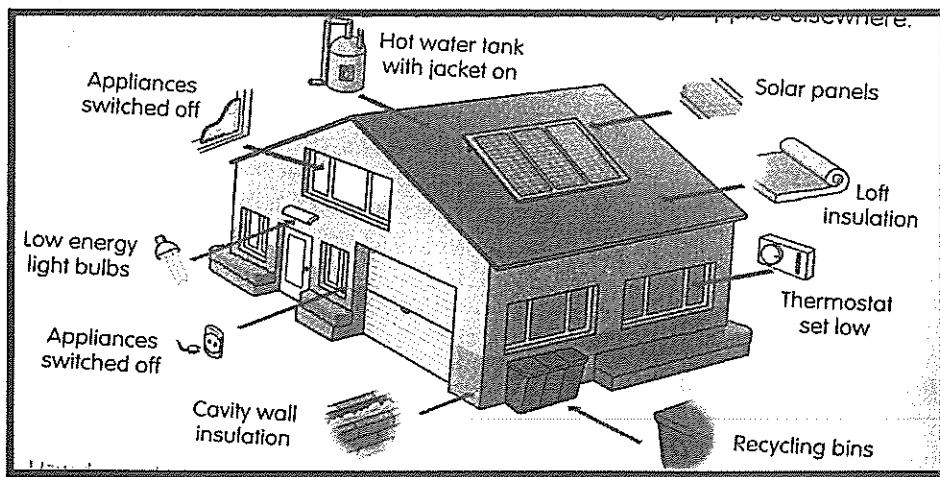
- A. Pollution
  - B. Afforestation
  - C. Deforestation
  - D. Conservation
30. Which of these groups contains **ONLY** natural resources?
- A. Water, sand, cement, tree
  - B. Water, fish, stone, sand
  - C. Water, bridge, fish, tree
  - D. Water, cement, fish, bridge

31. The resource shown in the picture below is classified as



- A. natural and renewable
- B. natural and non-renewable
- C. natural and exhaustible
- D. natural and disappearing

32. All these activities are undertaken by the homeowner to




- A. help reduce the negative impact on the environment
- B. reduce the house's mortgage
- C. show that they have a lot of money
- D. ensure that their house is the best in the neighbourhood

33. Which of these is NOT a by-product of crude oil?

- A. gasoline
- B. plastic
- C. glass
- D. tar

34. The steam from deep beneath the earth's crust can be trapped to generate:



- A. Geothermal energy
- B. Wind energy
- C. Solar energy
- D. Nuclear energy


35. What does the logo shown below mean?



- A. Turn left
- B. Black Lives Matter
- C. Recycle
- D. Cancer awareness

36. Which is the best reason why we should NOT hunt between March and August in Dominica?
- A. The weather is not suitable for hunting.
  - B. Animals usually mate and reproduce at that time
  - C. Most wildlife go into hiding at that time.
  - D. The days are too short during this time
37. International tourists come to Dominica from:
- A. Canada
  - B. Martinique
  - C. Antigua
  - D. Guadeloupe

Use the picture below to answer Questions 38 and 39



38. Which of the following will NOT be affected with the hotel development shown above?
- A. Employment opportunities
  - B. Climate
  - C. Trade
  - D. Environment

39. An **increase** in which one of the following could be a potential **disadvantage** of the development shown above?

- A. employment opportunities
- B. foreign exchange
- C. water pollution
- D. air quality

40. What type of trade is illustrated in the picture shown below?



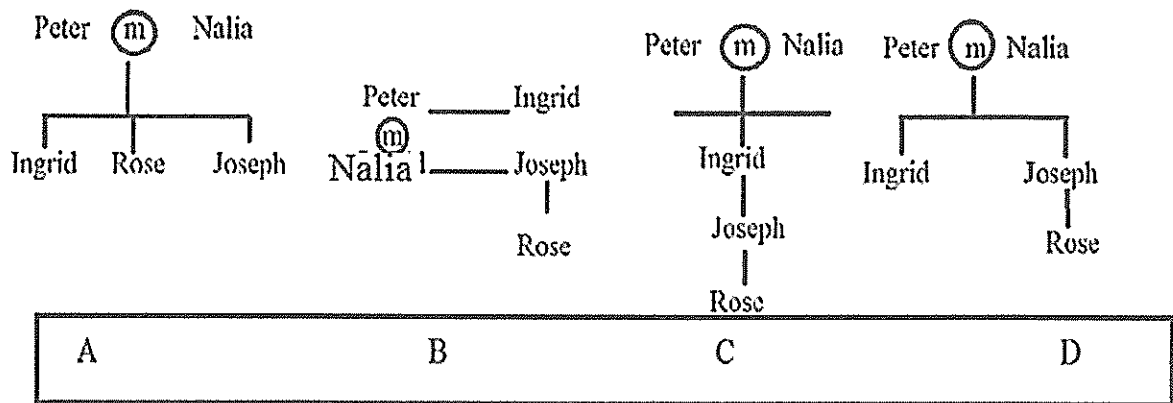
- A. Illegal trade
- B. Regional trade
- C. Local trade
- D. Black market

### **SOCIAL ISSUES AND CHANGE**

41. Drug addicts are dangerous to our communities because they sometimes

- A. steal to satisfy their habits
- B. export drugs to neighbouring islands
- C. drive recklessly on the road
- D. buy too many different types of drugs<sup>†</sup>

42. Ingrid, Joseph and Rose are the children of Peter and Nalia who are married. Which ONE of the following family trees shows this information?



43. What social problem is shown in the picture below?



- A. Teenage pregnancy
- B. Violence
- C. Burglary
- D. Homelessness

44. Which is the BEST way to help solve the problem of crime and violence among our youth?
- A. Teach them a new skill.
  - B. Arrest them before an activity.
  - C. Educate them about effects of their actions.
  - D. Ensure that they go to school.
45. Some of your schoolmates post lies about you on facebook. What MAIN type of bullying does this represent?
- A. physical
  - B. emotional
  - C. cyber
  - D. verbal
46. Mr. Brown wants to make a decision about buying a bus from a dealership in Japan. What do you think he would MOST LIKELY do?
- A. Travel to japan to visit various dealerships to make a choice
  - B. Use the internet to look at the vehicles on various companies' sites
  - C. Post letters to different companies asking them about their available vehicles.
  - D. Send a telegram to the companies inquiring about their vehicles.
47. Which of the following has contributed MOST to social change in our Dominican society?
- A. more celebrations
  - B. increased access to the internet
  - C. more family reunions
  - D. more imported vehicles

48. How can the government of a country bring about social change?
- A. Create more jobs
  - B. Try to stay in power
  - C. Help the rich get richer
  - D. Invest more in outside banks
49. 20 years ago, people communicated through letters. Nowadays, messages are delivered in an instant. This is due mainly to
- A. faster planes
  - B. the internet
  - C. countries being closer to each other
  - D. better services at the post office.
50. 40 years ago blind people could only understand Braille. Nowadays they are able to communicate in writing to almost anybody. Why is this possible?
- A. They can now read like other people
  - B. They use special pens
  - C. The increased upgrades to technology
  - D. Everybody can now understand braille

END OF EXAMINATION



*Ministry of Education, Human Resource Development  
Vocational Training & National Excellence*

*Dominica*

*Grade 6  
National Assessment  
May 27, 2021*

**TIME: 90 Minutes**

**©CMEU/2021**

**DO NOT TAKE THIS PAPER OUT OF THE EXAMINATION ROOM**

*Language Arts Paper 1*

LANGUAGE ARTS

INSTRUCTIONS:

READ THE FOLLOWING INSTRUCTIONS BEFORE ATTEMPTING THE TEST.

1. THIS PAPER CONTAINS SIXTY (60) QUESTIONS.
2. YOU HAVE NINETY (90) MINUTES TO COMPLETE THIS PAPER.
3. FOR EACH QUESTION, CIRCLE THE LETTER ON THE ANSWER SHEET THAT CORRESPONDS TO THE ANSWER YOU HAVE CHOSEN.
4. USE A PENCIL TO SHADE IN THE CORRECT ANSWER.

EXAMPLE

1. Which of the following is a noun?

- A. Alvin
- B. Jump
- C. Because
- D. Under

The correct answer is Alvin, letter A. On your answer sheet you shade



B

C

D

If there is a need to change your answer, erase it and circle your new answer.

5. IF YOU ARE UNABLE TO ANSWER A QUESTION LEAVE IT AND MOVE ON TO THE NEXT QUESTION. YOU WILL RETURN TO IT LATER IF THERE IS AVAILABLE TIME.

## USAGE/GRAMMAR

SHADE THE LETTER TO THE CORRECT ANSWER FOR ITEMS 1-4.

1. In which sentence is the word **lock** used as a verb?
  - A. The **lock** can only be opened with the long key
  - B. Corey closed the door and fastened the **lock**.
  - C. I think I need to buy a new kitchen **lock**.
  - D. Make sure you **lock** the gate before you leave.
  
2. Which sentence is **closest in meaning** to the one below?

**Mary has had this doll for two years.**

  - A. Mary no longer has this doll.
  - B. Mary is having this doll for her birthday.
  - C. Mary has this doll now.
  - D. Mary will have a doll in two years' time.
  
3. Which sentence is **grammatically correct**?
  - A. Once we had found a shady spot, we sit and play board games.
  - B. We sat and play board games once we had found a shady spot.
  - C. Once we find a shady spot, we sat and played board games.
  - D. We sat and played board games once we had found a shady spot.
  
4. Which sentence is **grammatically correct**?
  - A. It's difficult to find a job that really pays its workers well.
  - B. It's difficult to find a job that really pays it's workers well.
  - C. Its difficult to find a job that really pays it's workers well.
  - D. Its' difficult to find a job that really pays its workers well.

**CIRCLE THE LETTER THAT CORRESPONDS TO THE GRAMMATICAL ERROR IN EACH SENTENCE FOR ITEMS 5 – 7,**

5. I am finding it difficult to choose among my pair of red trousers and my pair of green ones.  
A                      B                      C                      D
6. Many people have claimed to have seen ghosts, but no one have proven that such things exist.  
A                      B                      C                      D
7. You have to admit that it is more colder now than it was a few days back.  
A                      B                      C                      D

**CHOOSE THE WORD THAT BEST COMPLETES THE SENTENCES FOR ITEMS 8-10.**

8. The homeless man slept in my \_\_\_\_\_ car last night.  
A. parentes'  
B. parents'  
C. parents's  
D. parents
9. Because many workers were sick today, Mr. Miller had to pack the goods on the shelves all by \_\_\_\_\_.  
A. hisself  
B. herself  
C. himself  
D. themselves
10. Tom still reached the finished line \_\_\_\_\_ he was feeling very tired.  
A. although  
B. because  
C. before  
D. therefore

## SPELLING

SELECT THE CORRECTLY SPELT WORDS TO COMPLETE EACH SENTENCE FOR ITEMS 11-14.

11. When flights start again, I would like to fly to the \_\_\_\_\_ for a vacation.
- A. Caribean
  - B. Caribbean
  - C. Carribbean
  - D. Caribbian
12. She has a fever because her \_\_\_\_\_ is high.
- A. temperture
  - B. temprature
  - C. temperature
  - D. temperateure
13. You must not \_\_\_\_\_ on private property.
- A. trespas
  - B. tresspass
  - C. tresspas
  - D. trespass
14. Leo always wanted to \_\_\_\_\_ the impossible
- A. achive
  - B. achevie
  - C. acheive
  - D. achieve

**SELECT THE LETTER FOR THE UNDERLINED WORDS THAT ARE  
INCORRECTLY SPELT FOR ITEMS 15-18.**

15. The astronut will attempt to leave the stationary spaceship and then return to it.  
A B C D
16. Ambassadors of a country are allowed various priviledges.  
A B C D
17. When Tom was reported to the principle, he immediately apologized.  
A B C D
18. Early signs of the infectious disease include muscele pain and fatigue.  
A B C D

**VOCABULARY**

**SELECT THE WORD CLOSEST IN MEANING TO THE UNDERLINED  
WORDS OR PHRASES FOR ITEMS 19-21.**

19. Let me be quite candid with you; your work is not good enough.  
A. interesting  
B. prompt  
C. frank  
D. vital
20. We cannot put up with your bad attitude any longer.  
A. understand  
B. support  
C. witness  
D. tolerate
21. The boat shook unexpectedly, causing the fishermen to fall.  
A. loudly  
B. suddenly  
C. quickly  
D. badly

**FOR ITEMS 22-28, SELECT THE MOST SUITABLE WORD TO COMPLETE THE SENTENCES.**

22. It will be impossible to \_\_\_\_\_ a room at the Fort Young Hotel this week because of the Carnival celebrations.
- A. respond
  - B. reserve
  - C. appoint
  - D. connect
23. Dana was \_\_\_\_\_ after the long run.
- A. fascinated
  - B. renewed
  - C. exhausted
  - D. entertained
24. Our time is limited so we can only deal with \_\_\_\_\_ matters.
- A. vital
  - B. outline
  - C. unimportant
  - D. great
25. The farmer was rushed to the hospital after he was stung by a \_\_\_\_\_ of bees.
- A. swarm
  - B. flight
  - C. flock
  - D. pack
26. Wood is opaque but glass is \_\_\_\_\_
- A. shiny
  - B. transparent
  - C. brittle
  - D. fragile

CHOOSE THE CORRECT PREFIX TO FORM THE WORD OPPOSITE IN MEANING TO THE UNDERLINED WORD.

27. I am sure what you are doing is legal.
- A. ex-
  - B. un-
  - C. dis-
  - D. il-

CHOOSE THE WORD OPPOSITE IN MEANING TO THE UNDERLINED WORD

28. He is very gentle with animals.
- A. rude
  - B. loud
  - C. calm
  - D. rough

### STUDY SKILLS

SHADE THE LETTER WHICH REPRESENTS THE CORRECT ANSWER

29. Which set of words below is written in alphabetical order?
- A. donor, domino, double, doorway
  - B. enter, envelope, episode, equip
  - C. meter, merit, metal, merry
  - D. rise, rocket, roller, ring
30. Which word would appear in the dictionary between the guide words *downfall* and *drain*?
- A. dread
  - B. double
  - C. dose
  - D. draft



31. Which source of information would be most helpful if someone was looking for the location of a country?
- A. almanac
  - B. dictionary
  - C. atlas
  - D. yellow pages

**USE THE DICTIONARY ENTRY BELOW TO ANSWER THE QUESTION**

**fav.our** ( fay – vur )

- 1. noun Something helpful or kind that you do for someone
- 2. noun A small gift
- 3. verb To like one thing or person better
- 4. verb To look like someone else

32. Which definition of **favour** is used in the sentence below?

The birthday girl gave me a party **favour**.

- A. 1
- B. 2
- C. 3
- D. 4

THE FOLLOWING PAGE WAS TAKEN FROM A BOOK. STUDY IT CAREFULLY, THEN ANSWER QUESTIONS 33- 36.

Chapter		Page
1	Introduction	4
2	The Aquarium	8
	• Aquarium equipment	20
	• Contents of the aquarium	28
3	The Fishes	42
	• Families	
	(i) live bearing guppies, mollies, swordfish	
	(ii) egg bearing: pearl fish, angel fish barbs	
	• Features of Fish	
4	Nutrition	120
5	Diseases of Fish	128
6	Setting up the Home Aquarium	138
7	Index	157

33. Which section of the book was this page taken from?

- A. glossary
- B. table of contents
- C. bibliography
- D. reference

34. On which page of the book can one find information on 'food for fish'?

- A. page 120
- B. page 42
- C. page 128
- D. page 28

35. In which chapter would a reader most likely find the sentence 'Fishes develop kidney failure?'
- A. Chapter 5
  - B. Chapter 4
  - C. Chapter 3
  - D. Chapter 1
36. On which page of the book does the information on 'Aquarium equipment' begin and on which page does it most likely end?
- A. Page 20 to 28
  - B. Page 20 to 27
  - C. Page 28 to 41
  - D. Page 8 to 20

## COMPREHENSION

THE FOLLOWING SECTION CONTAINS FOUR (4) COMPREHENSION PASSAGES.  
READ EACH PASSAGE THEN ANSWER THE QUESTIONS THAT FOLLOW

**READ THE STORY BELOW AND ANSWER QUESTIONS 37- 43.**

In the deep blue sea, there lived an octopus. He had eight arms, and his dearest wish was that every arm should be filled with treasure. He crawled and hopped along the ocean floor, always looking for some new shiny trinket to grab. At first, he had no problem getting around. He had a gold coin in one tentacle, a piece of silver statue in the other, but six of his arms were free.

Soon he found some pottery and part of a brass ornament. As time went on, he collected a few other items. At last, he had only one tentacle left empty. By this time, getting around the ocean was very difficult for the octopus. But the stubborn octopus didn't care. He had seven out of eight arms filled with treasures, and he would rather struggle along with his goodies than put some down to move freely.

One night the octopus realized that he was in the shark's feeding grounds. He wanted to swim away as fast as he could, using his one free arm, when he saw it. The biggest, most beautiful, shiny bright blue bottle. It twinkled like the moon on the sea. He snatched it up and hugged it tight.

"At last! All eight arms are full!" he cried.

At that moment, he heard a **sinister** voice. "I'm glad your arms are full. Do you know what's empty? My belly." The octopus gulped. The shark was swimming behind him, teeth spread in a wide leer.

"Oh no! What can I do?" The octopus panicked and tried to swim away. All he did was jumble his arms about, awkwardly rocking in place, unable to swim.

The octopus looked at all the beautiful things he had collected. He couldn't bear the thought of putting any of them down! The shark came closer, and he dropped one of his trinkets. He could feel the water rippling around him as the shark cut through the waves, closer and closer. With a squeak, the octopus let go of several more things, but kept clutching his gold coin, his silver statue, and his new blue bottle.

"Oh, don't run off," the shark snapped his teeth behind the octopus. He was so close, that the octopus felt his skin prickle. He looked behind him in time to see the shark's jaws were about to close around one of his arms! At last, the octopus let go of everything he had and used all eight arms to swim to freedom.

37. Which trait **BEST** describes the main character?

- A. generous
- B. humorous
- C. lazy
- D. greedy

38. At first, the octopus had no problem getting around because:

- A. all his arms were free
- B. only two of his arms were occupied
- C. He was alone in the sea
- D. He had a gold coin in one tentacle

39. According to the story, "*He wanted to swim away as fast as he could, using his one free arm when he saw it*".

What did the octopus see?

- A. the shark
- B. a beautiful treasure
- C. a shiny blue bottle
- D. the bright moonlight in the water

40. '*At that moment, he heard a **sinister** voice.*' What does the word **sinister** mean?

- A. loud
- B. quiet
- C. evil
- D. jovial

41. According to the passage, which statement tells that the octopus was fearful when he saw the shark?

- A. he screamed and swam quickly
- B. he panicked and was unable to swim
- C. he dropped one on his trinkets
- D. he hugged his treasures tightly

42. Which event most likely took place in the story?
- A. the shark bit the octopus
  - B. the octopus only got a few of the treasures
  - C. the shark made friends with the octopus
  - D. the octopus got away
43. Based on the events in the story, how do you think the shark felt at the end?
- A. disappointed
  - B. lucky
  - C. excited
  - D. relieved

READ THE PASSAGE AND ANSWER QUESTIONS 44 – 49.

A robot is a machine. But it is not just any machine. It is a special kind of machine. It is a machine that moves. It follows instructions. The instructions come from a computer. Because it is a machine, it does not make mistakes. And it does not get tired. And it never complains. Unless you tell it to!

Robots are all around us. Some robots are used to make things. For example, robots can help make cars. Some robots are used to explore dangerous places. For example, robots can help explore volcanoes. Some robots are used to clean things. These robots can help vacuum your house. Some robots can even recognize words. They can be used to help answer telephone calls. Some robots look like humans. But most robots do not. Most robots just look like machines.

Long ago, people imagined robots. Over 2,000 years ago, a famous poet imagined robots. The poet's name was Homer. His robots were made of gold. They cleaned and made things. But they were not real. They were imaginary. Nobody was able to make a real robot. The first real robot was made in 1961. It was called Unimate. It was used to help make cars. It looked like a giant arm.

In the future, we will have even more robots. They will do things that we can't do. Or they will do things that we don't want to do. Or they will do things that are too dangerous for us. Robots will help us fight fires. They will help us fight wars. They will help us fight sickness. They will help us discover things. They will help make life better.

44. When was the first real robot made?

- A. 1961
- B. 2003
- C. 1921
- D. 2000 years ago

45. In paragraph 1 it is stated that a robot is **special** kind of machine. We can understand that something special is **NOT**

- A. expensive
- B. perfect
- C. normal
- D. tired



46. What is the main purpose of paragraph 2?
- A. to show how easy it is to make a robot
  - B. to tell what a robot is
  - C. to describe the things a robot can do
  - D. to explain the difference between a robot and a machine
47. Robots take instructions from:
- A. cars
  - B. telephones
  - C. other robots
  - D. computers
48. According to the passage, which of these gives the **BEST** use of a robot?
- A. to help make a sandwich
  - B. to help explore space
  - C. to help tie shoes
  - D. to help read a book
49. Which of these statements correctly summarizes how the author of this passage feels about robots?
- A. robots are old machines
  - B. robots are confusing
  - C. robots are helpful
  - D. robots are dangerous

READ THE POEM AND ANSWER QUESTIONS 50 – 55.

1      A wild, gray guest blows into town  
2      And people pull their windows down  
3      Rushing up and down the streets,  
4      It shoves at everyone it meets  
5      We race inside and slam our doors.  
6      The angry guest shrieks and roars.  
7      “This storm,” we cry “is more than rain!  
8      It has become a hurricane!”  
9      Denied our hospitality,  
10     The guest tears through our fair city,  
11     It rips the branches off the trees  
12     And flings them in the street like skis  
13     Its greenish clouds swirl and burst.  
14     Its manners are the very worst!  
15     It serves us rain-a watery dish  
16     Streets are streams and cars are fish  
17     After putting out most every light  
18     And keeping us awake all night,  
19     The storm departs, a most rude guest,  
20     Leaving us to clean its mess.  
21     “This storm,” we cry “is more than rain!  
22     It has become a hurricane!”

50.     How do the residents in the city react to the guest?
- A.     they fight against it
  - B.     they run from it
  - C.     they welcome it
  - D.     they ask it to return

51. Which lines from the poem rhyme?
- A. lines 1 and 4
  - B. lines 9 and 11
  - C. lines 13 and 14
  - D. lines 16 and 20
52. What does the word **shrieks** mean in line 6?
- A. laugh
  - B. asks
  - C. sings
  - D. screams
53. Line 16 reads '*Streets are streams and cars are fish.*' Why does the poet compare cars to fish?
- A. To show that cars moved in the ~~in~~ water
  - B. To show that the cars are blue
  - C. To explain how cars move
  - D. To explain why the cars are full of fish
54. What is the speaker's **main purpose** in the poem?
- A. To persuade the townspeople to offer hospitality to the "guest".
  - B. To inform readers about the power of a storm.
  - C. To share her feelings about the "guest".
  - D. To teach readers to seek shelter during a storm.
55. Which title **BEST** suits this poem?
- A. An Approaching Storm
  - B. The Slow Storm
  - C. The Unwelcome Visitor
  - D. A Rainy Day

READ THE LABEL BELOW AND SHADE THE LETTER CLOSEST TO THE CORRECT RESPONSE.

**PULL – APART CHEESE**

- |                                   |                                       |
|-----------------------------------|---------------------------------------|
| ➤ Fun to eat                      |                                       |
| ➤ Just peel off a piece and enjoy | ➤ Ready to go. Just pop into          |
| ➤ Nutritious                      | lunchboxes or backpacks               |
| ➤ Low fat                         | ➤ Lots of strings from just one stick |
| ➤ Tasty                           | ➤ Dip it                              |
| ➤ All natural                     | ➤ Fry it                              |

**No Wonder Everyone Loves It!**

56. This food is a:

- A. candy bar
- B. fruit
- C. snack
- D. main dish

57. What do you need to eat this food?

- A. your fingers
- B. a spoon
- C. a napkin
- D. a hammer

58. Who would probably like this food?

- A. only children
- B. only adults
- C. someone who likes fatty food
- D. anyone who likes cheese

59. What clue tells you that it doesn't take long to prepare this food?

- A. tasty
- B. ready to go
- C. fun to eat
- D. all natural

60. What do you think is the main ingredient in this food?

- A. fat
- B. carrot
- C. cheese
- D. apple

END OF EXAMINATION